



INDIAN SCHOOL AL WADI AL KABIR

DEPARTMENT OF EVS [2020 – 2021]

LESSON: **MAPPING OUR NEIGHBOURHOOD**

WORKSHEET 2

RESOURCE PERSON: MS USHA ABRAHAM

NAME: _____ CLASS: IV SEC: _____ DATE: _____

I. Choose the correct words to fill in the blanks:

- A _____ is displayed at the entrance of a colony. (road map/colony map)
- The colour green indicates _____ on the map. (highlands/plains)
- Maps use many _____ and symbols to give different types of information. (landmark/signs)
- The south west lies between the _____ and the _____. (south, west/south, east)

II. Circle the odd one out and give a reason for it.

- a) key symbol landmark dam
- _____

- b) yellow green snow brown
- _____

- c) road map north south east
- _____

III. Circle the correct option.

1. We can get road maps from

- (a) bookshops (b) shopping malls (c) homes (d) school

2. If the scale on a map is 100km=1cm, then the distance between Agra and Delhi which is 200km will be shown as

- (a) 2Km (b) 2cm (c) 3cm (d) 3Km

3. What does the colour blue on a map represent?





(a) plains

(b) mountains

(c) snow

(d) water bodies

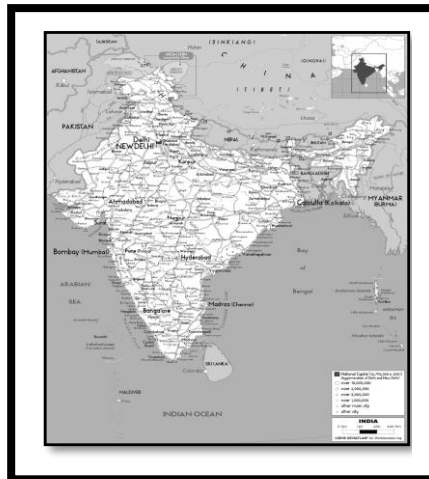
IV. Observe the symbols and write what each symbol symbolises:

	
a.	b.
	
c.	d.

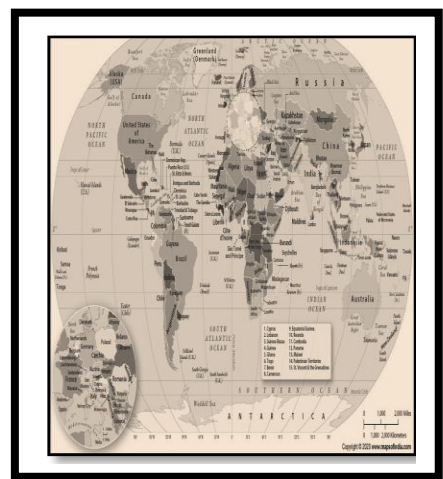
V. Observe the following maps carefully and name the following:



a. _____



b. _____



c. _____



